



Tests Edit Test

Tests Groups Links

Primary 5 Maths (Term 4) - Tao Nan ✓

- Duplicate
- Print
- Delete

Assign Test

Test Introduction

+ Add Introduction

55 Questions (92 Points)

Question Bank: 9,275 Questions ?

- Test Questions
- 1 Test Assignment

Question 1	Primary 5 Maths » Primary 5 Maths (Term 4)	1 pt
77 tens + 7 tenths + 7 thousandths = ____		
Answers Edit Duplicate Used In Reorder Remove From Test		
Question 2	Primary 5 Maths » Primary 5 Maths (Term 4)	1 pt
The length of a school bus is about ____		
Answers Edit Duplicate Used In Reorder Remove From Test		
Question 3	Primary 5 Maths » Primary 5 Maths (Term 4)	1 pt
Find the value of 4 wholes and 8 quarters.		
Answers Edit Duplicate Used In Reorder Remove From Test		
Question 4	Primary 5 Maths » Primary 5 Maths (Term 4)	1 pt
A certain number has 5 factors. They are: 1,2,8,16 and ____ What is the missing factor?		
Answers Edit Duplicate Used In Reorder Remove From Test		
Question 5	Primary 5 Maths » Primary 5 Maths (Term 4)	1 pt

The value of $3\frac{1}{2} + 2\frac{1}{3}$ is _____.

[Answers](#) | [Edit](#) | [Duplicate](#) | [Used In](#) | [Reorder](#)

[Remove From Test](#)

Question 6

Primary 5 Maths » Primary 5 Maths (Term 4)

1 pt

Express 3.9% as a decimal.

[Answers](#) | [Edit](#) | [Duplicate](#) | [Used In](#) | [Reorder](#)

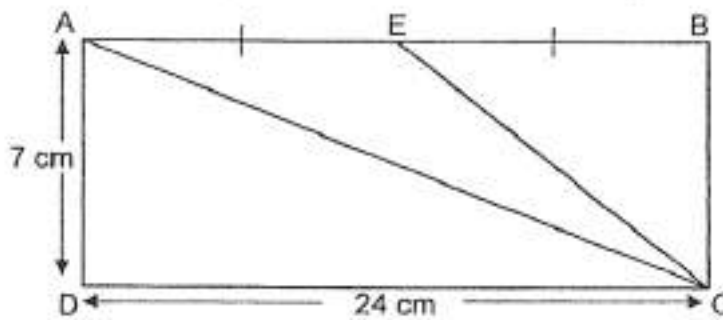
[Remove From Test](#)

Question 7

Primary 5 Maths » Primary 5 Maths (Term 4)

1 pt

Find the area of Triangle ACE.



[Answers](#) | [Edit](#) | [Duplicate](#) | [Used In](#) | [Reorder](#)

[Remove From Test](#)

Question 8

Primary 5 Maths » Primary 5 Maths (Term 4)

1 pt

Teck Wee bought the armchair. How much did he pay?



Usual Price: \$500

SALE

20% discount

[Answers](#) | [Edit](#) | [Duplicate](#) | [Used In](#) | [Reorder](#)

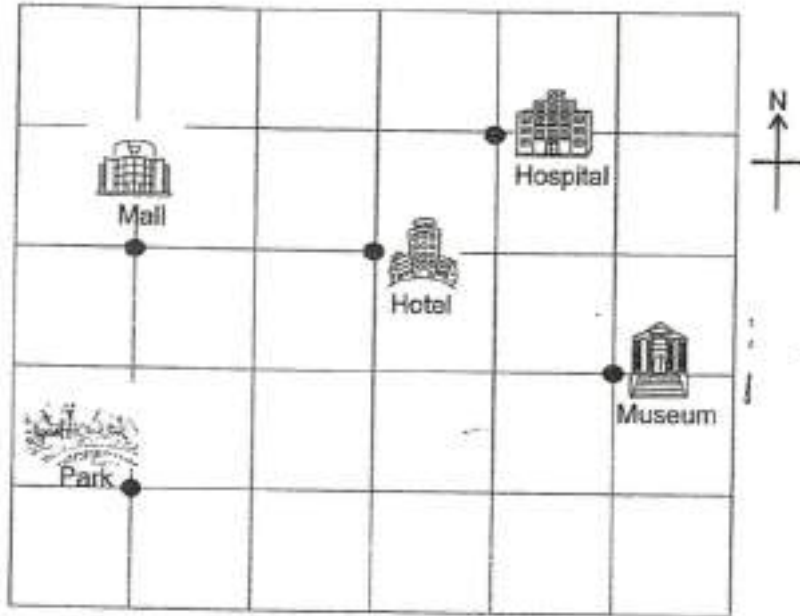
[Remove From Test](#)

Question 9

Primary 5 Maths » Primary 5 Maths (Term 4)

1 pt

The _____ is south-west of the Hotel.



[Answers](#) | [Edit](#) | [Duplicate](#) | [Used In](#) | [Reorder](#)

[Remove From Test](#)

Question 10

Primary 5 Maths » Primary 5 Maths (Term 4)

1 pt

Min Sen scored 74 points for a game. Ahmad scored 4 points more than Min Sen for the same game. What was their average score?

[Answers](#) | [Edit](#) | [Duplicate](#) | [Used In](#) | [Reorder](#)

[Remove From Test](#)

Question 11

Primary 5 Maths » Primary 5 Maths (Term 4)

2 pts

Find the value of $3 \times 12 + 36 \div (3 \times 2)$

[Answers](#) | [Edit](#) | [Duplicate](#) | [Used In](#) | [Reorder](#)

[Remove From Test](#)

Question 12

Primary 5 Maths » Primary 5 Maths (Term 4)

2 pts

Chen Peng filled a cubical tank of edge 40 cm with water. What was the volume of water in the tank when it was $\frac{3}{4}$ full?

[Answers](#) | [Edit](#) | [Duplicate](#) | [Used In](#) | [Reorder](#)

[Remove From Test](#)

Question 13

Primary 5 Maths » Primary 5 Maths (Term 4)

2 pts

At a supermarket, crabs are sold at \$5 for every 200g. How much does 1kg of crabs cost?

[Answers](#) | [Edit](#) | [Duplicate](#) | [Used In](#) | [Reorder](#)

[Remove From Test](#)

Question 14

Primary 5 Maths » Primary 5 Maths (Term 4)

2 pts

Josh and Charlotte baked some cakes in the ratio of 2:7. Josh baked 60 fewer cakes than Charlotte.
How many cakes did they bake altogether?

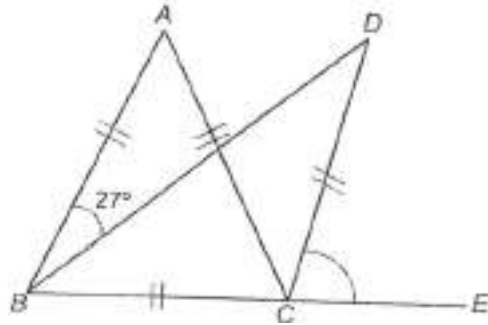
[Answers](#) | [Edit](#) | [Duplicate](#) | [Used In](#) | [Reorder](#)

[Remove From Test](#)**Question 15**

Primary 5 Maths » Primary 5 Maths (Term 4)

2 pts

$\triangle ABC$ is an equilateral triangle. $\triangle BCD$ is an isosceles triangle. BCE is a straight line. Find $\angle DCE$.



[Answers](#) | [Edit](#) | [Duplicate](#) | [Used In](#) | [Reorder](#)

[Remove From Test](#)**Question 16**

Primary 5 Maths » Primary 5 Maths (Term 4)

1 pt

found 198.395 to two decimal places.

[Answers](#) | [Edit](#) | [Duplicate](#) | [Used In](#) | [Reorder](#)

[Remove From Test](#)**Question 17**

Primary 5 Maths » Primary 5 Maths (Term 4)

1 pt

Express 8 kg 76g in kilograms.

[Answers](#) | [Edit](#) | [Duplicate](#) | [Used In](#) | [Reorder](#)

[Remove From Test](#)**Question 18**

Primary 5 Maths » Primary 5 Maths (Term 4)

1 pt

Find the product of $\frac{4}{9}$ and $\frac{3}{8}$. Leave your answer as a fraction in its simplest form.

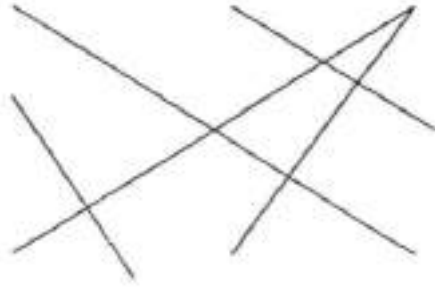
[Answers](#) | [Edit](#) | [Duplicate](#) | [Used In](#) | [Reorder](#)

[Remove From Test](#)**Question 19**

Primary 5 Maths » Primary 5 Maths (Term 4)

1 pt

How many pair(s) of parallel lines are there in the figure?



[Answers](#) | [Edit](#) | [Duplicate](#) | [Used In](#) | [Reorder](#)

[Remove From Test](#)

Question 20

Primary 5 Maths » Primary 5 Maths (Term 4)

1 pt

The table below shows the number of books borrowed by students from the library.

Number of books	Number of students
0	13
1	64
2	47
3	72
4	48
More than 4	19

How many students read at least 3 ~~Mathematics~~ books?

[Answers](#) | [Edit](#) | [Duplicate](#) | [Used In](#) | [Reorder](#)

[Remove From Test](#)

Question 21

Primary 5 Maths » Primary 5 Maths (Term 4)

2 pts

The lowest amount of earnings would be the same for the following Monday

[Answers](#) | [Edit](#) | [Duplicate](#) | [Used In](#) | [Reorder](#)

[Remove From Test](#)

Question 22

Primary 5 Maths » Primary 5 Maths (Term 4)

0 pts

The pattern below is made up of black and white tiles.



Figure 1




Figure 2




Figure 3

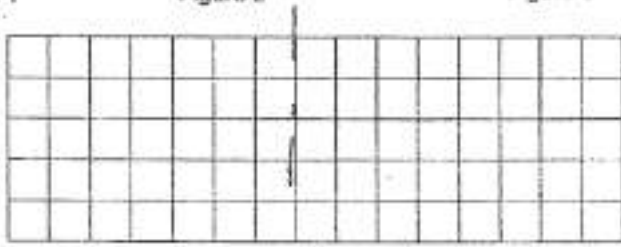


Figure 5

Figure Number	Number of Black Tiles	Number of White Tiles	Total Number of Tiles
1	5	4	9
2	8	7	15
3	11	10	21

(a) Draw Figure 5 in the box given? [1]

Please type "done" to proceed to the next question

[Answers](#) | [Edit](#) | [Duplicate](#) | [Used In](#) | [Reorder](#)

[Remove From Test](#)

Question 23

Primary 5 Maths » Primary 5 Maths (Term 4)

2 pts

b) How many white tiles and how many black tiles are there in Figure 10?

[Answers](#) | [Edit](#) | [Duplicate](#) | [Used In](#) | [Reorder](#)

[Remove From Test](#)

Question 24

Primary 5 Maths » Primary 5 Maths (Term 4)

2 pts

c) Find the figure number that has a total of 105 black and white tiles.

[Answers](#) | [Edit](#) | [Duplicate](#) | [Used In](#) | [Reorder](#)

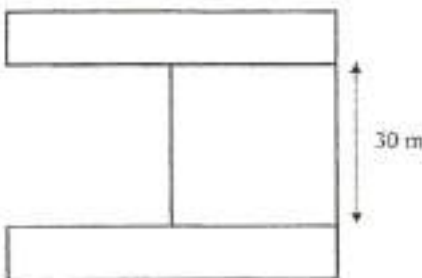
[Remove From Test](#)

Question 25

Primary 5 Maths » Primary 5 Maths (Term 4)

2 pts

The figure is made up of two rectangles and a square. The length of the rectangle is twice the length of a square. The breadth of the rectangle is $\frac{1}{3}$ the breadth of the square. What is the perimeter of the figure?



[Answers](#) | [Edit](#) | [Duplicate](#) | [Used In](#) | [Reorder](#)


[Remove From Test](#)

Question 26

Primary 5 Maths » Primary 5 Maths (Term 4)

2 pts

Mrs Tan has \$240 to buy water bottles as gifts. She wants to buy an equal number of Bottle A and Bottle B.



What is the total number of water bottles she can buy with all the money?

[Answers](#) | [Edit](#) | [Duplicate](#) | [Used In](#) | [Reorder](#)

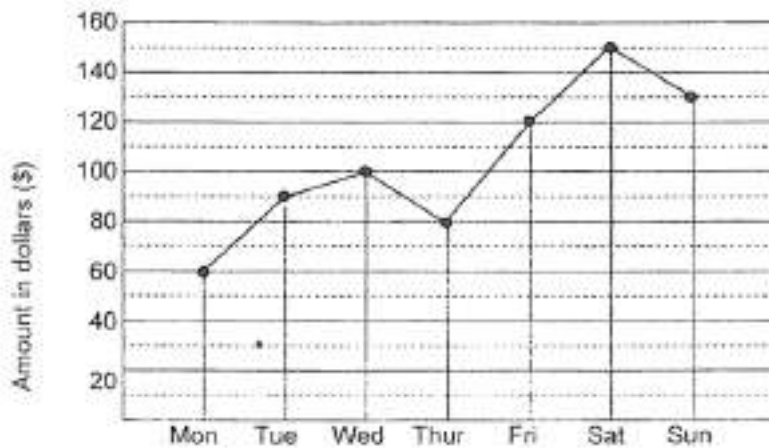
[Remove From Test](#)

Question 27

Primary 5 Maths » Primary 5 Maths (Term 4)

2 pts

The line graph shows the daily earnings of a candy shop in a week.



Study the information given carefully. Then check (✓) the correct boxes to indicate the answers you have chosen.

There was an increase in earnings every day.

[Answers](#) | [Edit](#) | [Duplicate](#) | [Used In](#) | [Reorder](#)

[Remove From Test](#)

Question 28

Primary 5 Maths » Primary 5 Maths (Term 4)

2 pts

the higher amount of earnings was on Saturday

[Answers](#) | [Edit](#) | [Duplicate](#) | [Used In](#) | [Reorder](#)

[Remove From Test](#)

Question 29

Primary 5 Maths » Primary 5 Maths (Term 4)

2 pts

Alice and Peter had the same amount of money at first. After Alice spent \$31.75 on food and Peter spent \$19.55 on drinks, Peter had three times as much money left as Alice. How much money did Peter have at first?

[Answers](#) | [Edit](#) | [Duplicate](#) | [Used In](#) | [Reorder](#)

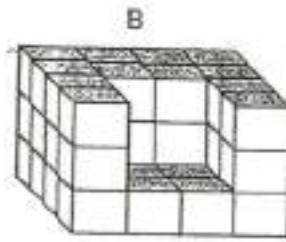
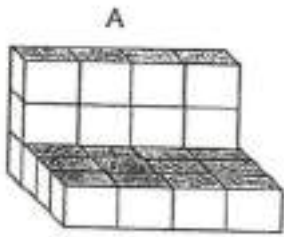
[Remove From Test](#)

Question 30

Primary 5 Maths » Primary 5 Maths (Term 4)

2 pts

Solid A and Solid B are made up of 1-cm cubes.



(a) How many 1-cm cubes are there in Solid A?

[Answers](#) | [Edit](#) | [Duplicate](#) | [Used In](#) | [Reorder](#)

[Remove From Test](#)

Question 31

Primary 5 Maths » Primary 5 Maths (Term 4)

2 pts

b) Some 1cm cubes are added to Solid to form Solid B. Find the volume of Solid B.

[Answers](#) | [Edit](#) | [Duplicate](#) | [Used In](#) | [Reorder](#)

[Remove From Test](#)

Question 32

Primary 5 Maths » Primary 5 Maths (Term 4)

2 pts

In a farm, the ratio of the number of sheep to the number of ducks is 2:3. These animals have a total of 70 legs. How many sheep are there?

[Answers](#) | [Edit](#) | [Duplicate](#) | [Used In](#) | [Reorder](#)

[Remove From Test](#)

Question 33

Primary 5 Maths » Primary 5 Maths (Term 4)

2 pts

The original price of a bag in Shop A and an identical one in Shop B was the same. Mohamad bought the bag from Shop A at a 10% discount. Tim bought a similar bag at a 32% discount from Shop B. The difference in amount paid by them was \$66. How much did Tim pay for the bag?

[Answers](#) | [Edit](#) | [Duplicate](#) | [Used In](#) | [Reorder](#)

[Remove From Test](#)

Question 34

Primary 5 Maths » Primary 5 Maths (Term 4)

2 pts

Mrs Chan needed to buy 223 muffins for a Children's Home.



1 box costs \$9.60



1 box costs \$11.20



1 muffin costs \$1.80

What is the minimum amount of money spent?

[Answers](#) | [Edit](#) | [Duplicate](#) | [Used In](#) | [Reorder](#)

[Remove From Test](#)

Question 35

Primary 5 Maths » Primary 5 Maths (Term 4)

2 pts

The table below shows the carpark charges at Playpark.

For the 1 st hour	\$2.80
For every additional 1 hour or part thereof	\$1.40

Mr Ahmad parked his car from 9.15 a.m. to 1.30 p.m.

(a) How much parking charges did Mr Ahmad have to pay?

[Answers](#) | [Edit](#) | [Duplicate](#) | [Used In](#) | [Reorder](#)

[Remove From Test](#)

Question 36

Primary 5 Maths » Primary 5 Maths (Term 4)

2 pts

b) Mr Ahmad's cash card had a value of \$26.80. How much money was left in the cash card after paying for the carpark charges?

[Answers](#) | [Edit](#) | [Duplicate](#) | [Used In](#) | [Reorder](#)

[Remove From Test](#)

Question 37

Primary 5 Maths » Primary 5 Maths (Term 4)

1 pt

The school bus was scheduled to leave the school at 1.15 p.m. However, it was delayed for $\frac{1}{5}$ hour. What time did the school bus leave the school?

[Answers](#) |
 [Edit](#) |
 [Duplicate](#) |
 [Used In](#) |
 [Reorder](#)

[Remove From Test](#)

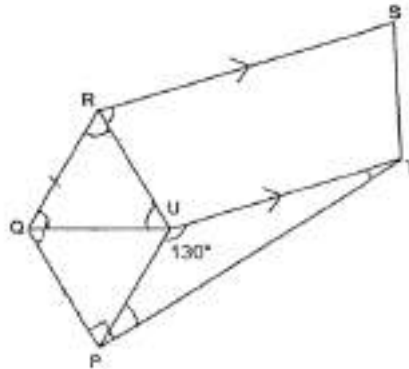
Question 38

Primary 5 Maths » Primary 5 Maths (Term 4)

2 pts

RSTU is a trapezium and PQRU is a rhombus. QRU is an equilateral triangle and PUT is a triangle. $\angle PUT = 130^\circ$.

Find
(a) $\angle PTU$



[Answers](#) |
 [Edit](#) |
 [Duplicate](#) |
 [Used In](#) |
 [Reorder](#)

[Remove From Test](#)

Question 39

Primary 5 Maths » Primary 5 Maths (Term 4)

2 pts

b) Find $\angle SRU$

[Answers](#) |
 [Edit](#) |
 [Duplicate](#) |
 [Used In](#) |
 [Reorder](#)

[Remove From Test](#)

Question 40

Primary 5 Maths » Primary 5 Maths (Term 4)

2 pts

The table below shows the rates of charges for taxi fare.

First 2 km	\$3.40
Every additional 1 km or part thereof	\$0.40

Amran paid a total of \$5.40. What was the maximum distance he travelled?

[Answers](#) |
 [Edit](#) |
 [Duplicate](#) |
 [Used In](#) |
 [Reorder](#)

[Remove From Test](#)

Question 41

Primary 5 Maths » Primary 5 Maths (Term 4)

2 pts

Mr Tan mixed 3.8kg of Grade A coffee beans with 4.15kg of Grade B coffee beans. Then he packed all the mixture into boxes of 20g each. How many 20g boxes are there?

[Answers](#) | [Edit](#) | [Duplicate](#) | [Used In](#) | [Reorder](#)

[Remove From Test](#)

Question 42

Primary 5 Maths » Primary 5 Maths (Term 4)

2 pts

Rita had 3 kg of sugar. She used $\frac{3}{5}$ of it to make some desserts and $\frac{3}{4}$ of the remainder to bake some cakes.

(a) How much sugar did she use to make the desserts?

Give your answers in kilograms.

[Answers](#) | [Edit](#) | [Duplicate](#) | [Used In](#) | [Reorder](#)

[Remove From Test](#)

Question 43

Primary 5 Maths » Primary 5 Maths (Term 4)

2 pts

b) She used 25g of sugar to make each cake. How many more cakes could she make with the sugar that she had left?

[Answers](#) | [Edit](#) | [Duplicate](#) | [Used In](#) | [Reorder](#)

[Remove From Test](#)

Question 44

Primary 5 Maths » Primary 5 Maths (Term 4)

2 pts

The table below shows the number of different types of cupcakes that William baked.

Number of Cupcakes	
Strawberry	35
Blueberry	?
Vanilla	24
Chocolate	46
Total	140

What percentage of the cupcakes were Blueberry cupcakes?

[Answers](#) | [Edit](#) | [Duplicate](#) | [Used In](#) | [Reorder](#)

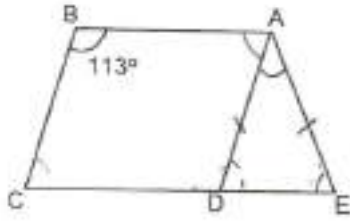
[Remove From Test](#)

Question 45

Primary 5 Maths » Primary 5 Maths (Term 4)

2 pts

In the figure shown below, ABCD is a parallelogram. ADE is an isosceles triangle. $AD = AE$. Find $\angle DAE$.



[Answers](#) | [Edit](#) | [Duplicate](#) | [Used In](#) | [Reorder](#)


[Remove From Test](#)

Question 46

Primary 5 Maths » Primary 5 Maths (Term 4)

2 pts

Raju used 60 posts to build a fence around his rectangular-shaped garden. He placed the posts at equal intervals. 17 posts were placed on each long side of the garden. How many posts were placed on each short side?



[Answers](#) | [Edit](#) | [Duplicate](#) | [Used In](#) | [Reorder](#)

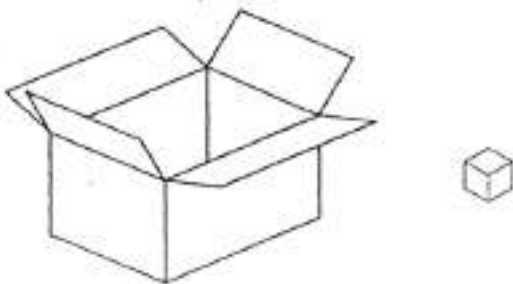
[Remove From Test](#)

Question 47

Primary 5 Maths » Primary 5 Maths (Term 4)

2 pts

A wooden box is 20.5 cm long, 15 cm wide and 10 cm tall. What is the maximum number of 1-cm cubes that can be placed into the wooden box?



[Answers](#) | [Edit](#) | [Duplicate](#) | [Used In](#) | [Reorder](#)

[Remove From Test](#)

Question 48

Primary 5 Maths » Primary 5 Maths (Term 4)

2 pts

Mary and Eve had the same number of roses. Then Eve gave $\frac{4}{5}$ of her roses to her mother and Mary gave away $\frac{3}{4}$ of her roses to her friends. The number of roses Mary had left was 3 more than the number of roses Eve had left. How many roses did Eve have at first?

[Answers](#) | [Edit](#) | [Duplicate](#) | [Used In](#) | [Reorder](#)

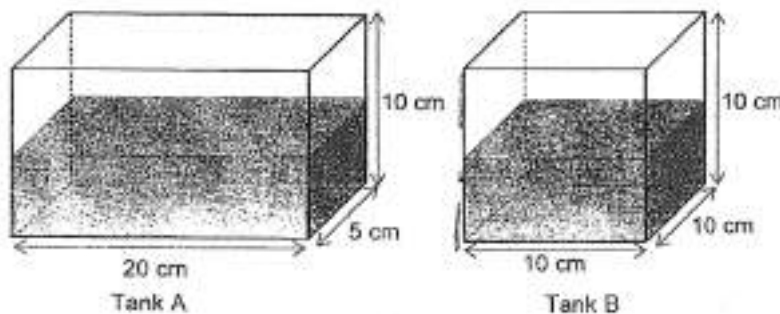
[Remove From Test](#)

Question 49

Primary 5 Maths » Primary 5 Maths (Term 4)

2 pts

Equal amount of water is poured into 2 empty tanks, Tank A and Tank B, as shown below. If Tank A is half-filled, what is the height of the water level in Tank B?



[Answers](#) | [Edit](#) | [Duplicate](#) | [Used In](#) | [Reorder](#)

[Remove From Test](#)

Question 50

Primary 5 Maths » Primary 5 Maths (Term 4)

2 pts

The average amount of money Hashim and Benny had was \$280. After Benny spent \$83 and Hashim received \$48 from his uncle, Benny had $\frac{1}{4}$ as much money as Hashim. What is the difference in the amount of money Benny and Hashim had at first?

[Answers](#) | [Edit](#) | [Duplicate](#) | [Used In](#) | [Reorder](#)

[Remove From Test](#)

Question 51

Primary 5 Maths » Primary 5 Maths (Term 4)

2 pts

Two companies donated \$34 293 and \$53 123 to an orphanage. What was the total amount of donation when rounded to the nearest thousand?

[Answers](#) | [Edit](#) | [Duplicate](#) | [Used In](#) | [Reorder](#)

[Remove From Test](#)

Question 52

Primary 5 Maths » Primary 5 Maths (Term 4)

2 pts

Chester used $\frac{1}{4}$ of a packet of flour for some biscuits and $\frac{5}{6}$ of the remainder for some dumplings. After that, 90 g of the packet of flour was left. What was the mass of the packet of flour at first?

[Answers](#) | [Edit](#) | [Duplicate](#) | [Used In](#) | [Reorder](#)

[Remove From Test](#)

Question 53

Primary 5 Maths » Primary 5 Maths (Term 4)

2 pts

The total mass of Alvin, Ben and Carl was 97.2 kg. Alvin's mass was 5.2 kg less than Ben. Ben's mass was 4.3 kg less than Carl. What is Alvin's mass?

[Answers](#) | [Edit](#) | [Duplicate](#) | [Used In](#) | [Reorder](#)

[Remove From Test](#)

Question 54

Primary 5 Maths » Primary 5 Maths (Term 4)

2 pts

$\frac{3}{7}$ of the fruits in a fruit farm are mangoes. Half of the rest of the fruits were sold to customers. Amongst the mangoes, $\frac{6}{11}$ of them are bad and 1050 are good. How many fruits were sold to the customers?

[Answers](#) | [Edit](#) | [Duplicate](#) | [Used In](#) | [Reorder](#)

[Remove From Test](#)

Question 55

Primary 5 Maths » Primary 5 Maths (Term 4)

2 pts

A bottle contains 1.75 l of orange juice. Mrs Lim keeps 850 ml in the refrigerator and gives the remainder equally to her 3 children. How much orange juice does each child get?

[Answers](#) | [Edit](#) | [Duplicate](#) | [Used In](#) | [Reorder](#)

[Remove From Test](#)